



## My Exams

Exams you have taken in the past

[Home](#) / [Dashboard](#) / My Exams

### Result for "2021 Mock Test 01"

Taken on : Nov 25, 2021 02:43 pm

Marks Obtained	15
Correct Answer	22
Wrong Answer	28

Analytical: 67% (2/3)

Mathematics: 45% (10/22)

Verbal: 40% (10/25)

Marks for written section : Not marked yet

[DOWNLOAD YOUR RESULT AS PDF](#)

[DOWNLOAD QUESTION](#)

[MCQ Module](#)

[Written Module](#)

### MCQ QUESTIONS FOLLOW UP

Section 1: Mathematics 30×1=30 marks

Instructions: Solve each of the following problems and mark the correct answer on your Answer Sheet.

DO NOT USE A CALCULATOR. Figures are not drawn to scale.

1. A Milkman has 3 jars containing 57, 129 and 177 liters of pure milk respectively. A measuring can, after a different number of exact measurements of milk in each jar, leaves the same amount of milk unmeasured in each jar. What is the volume of the largest such can?

Mathematics

Your answer : **WRONG**

A. 12 ✘

B. 16

C. 24

D. 32

E. 48

2. When a number is divided by 10,000, the remainder is 89. What is the remainder when the same number is divided by 1,000?

Mathematics

Your answer : **WRONG**

A. 8

B. 9

C. 69

D. 89

E. 890 ✖

3. Two buses with speed of 20 km/h and 10 km/h start from a bus terminal towards the same direction. After 10 minutes, a man coming from the opposite direction crosses the two buses at an interval of 8 minutes. What was the speed of the man?

Mathematics

Your answer : **WRONG**

A. 5 km/h

B. 8 km/h

C. 10 km/h

D. 2.5 km/h

E. None of these ✖

4. In how many ways can 15 people be seated around two round tables with seating capacities of 7 & 8 people?

Mathematics

Your answer : **WRONG**

A.  $15!/8!$

B.  $7! \times 8!$  ✖

C.  $15C_8 \times 6! \times 7!$

D.  $2 \times 15C_7 \times 6! \times 7!$

E. 15C8×8!

5. Asif speaks truth in  $\frac{3}{4}$  cases and Rakib lies in  $\frac{1}{5}$  cases. What is the percentage of cases in which both Asif and Rakib contradict each other in stating a fact?

Mathematics

Your answer : **WRONG**

A. 60%

B. 35%

C. 30%

D. 20 %

E. 15% ✘

6. A can contains a mixture of two liquids A and B in the ratio 7:5 when 9 liters of mixture are drawn off and the can is filled with B, the ratio of A and B becomes 7:9. How many liters of liquid A was contained by the can initially?

Mathematics

Your answer : **SKIPPED**

A. 28 liters

B. 21 liters

C. 45 liters

D. 36 liters

E. None of these

7. A set has exactly five consecutive positive integers starting with 1. What is the percentage decrease in the average of the numbers when the greatest one of the numbers is removed from the set?

Mathematics

Your answer : **CORRECT**

A. 8.54

B. 12.56

C. 15.25

D. 16.66 

E. None of these

8. If  $2^{n-1} + 2^{n+1} = 320$ , then what is the value of  $n$ ?

Mathematics

Your answer : **WRONG**

A. 2

B. 3

C. 4 

D. 5

E. None of these

9. A rectangular courtyard 3.78 meters long and 5.25 meters wide is to be paved with exactly square tiles, all of the same size. What is the largest size of the tile which could be used for the purpose?

Mathematics

Your answer : **SKIPPED**

A. 14 cm

B. 21 cm

C. 42 cm

D. 63 cm

E. None of these

10. The marked price of a shirt and trousers are in the ratio 1:2. The shopkeeper gives 40% discount on the shirt. If the total discount in the set of the shirt and trousers is 30%, the discount offered on the trousers is:

Mathematics

Your answer : **CORRECT**

A. 15%

B. 20%

C. 25% 

D. 30%

E. None of these

11. In a two digit number, it is known that it's unit digit exceeds its tens digit by 2 and that the product of the given number and sum of its digits is equal to 144, the number is-

Mathematics

Your answer : **CORRECT**

A. 46

B. 42

C. 26

D. 24 

E. None

12. A bath can be filled by the cold water pipe in 10 min and by hot water pipe in 15 min (independently each). A person leaves the bathroom after turning on both pipes simultaneously and returns at the moments when the bath should be full. Finding, however, that the waste pipe has been open he now closes it. In 4 min more, bath is full. In what time would be the waste pipe empty it?

Mathematics

Your answer : **CORRECT**

A. 9 min 

B. 12 min

C. 15 min

D. 14 min

E. None of these

13. A man buys a field of agricultural land for tk. 3,60,000. He sells one-third at a loss of 20% and two-fifths at a gain of 25%. At what price must he sell the remaining field so as to make an overall profit of 10%?

Mathematics

Your answer : **WRONG**

A. Tk. 1,00,000

B. Tk. 1,15,000

C. Tk. 1,20,000

D. Tk. 1,25,000 ✘

E. None of these

14. The L.C.M of two numbers is 495 and their H.C.F is 5. If sum of the numbers is 100, then their difference is-

Mathematics

Your answer : SKIPPED

A. 15

B. 16

C. 70

D. 90

E. None of these

15. When a student weighing 50 kgs left a class, the average weight of the remaining 49 students increased by 300 g. What is the average weight of the remaining 49 students?

Mathematics

Your answer : WRONG

A. 65

B. 64.8 ✘

C. 66.8

D. 66.2

E. None of these

16. Abir, Sadib and Tazul enter into a partnership with capitals in the ratio 3:2:1 After 4 months, Abir leaves the business and after 4 more months Sadib also leaves the business and Tazul continues till the end of the year. If Tazul takes 10% of the profit for managing the business, then what part of the profit does Tazul get?

Mathematics

Your answer : CORRECT

A. 37% 👍

B. 36%

C. 27%

D. 30%

E. None of these

17. In a certain school, 20% of students are below 8 years of age. The number of students above 8 years of age is  $\frac{2}{3}$ rd of the number of students of 8 years age which is 48. What is the total number of students in the school?

Mathematics

Your answer : **CORRECT**

A. 72

B. 80

C. 120

D. 150

E. None of these 

18. Banna walks to and fro to a shopping mall. He spends 30 minutes shopping. If he walks at speed of 10 km an hour, he returns to home at 19.00 hours. If he walks at 15 km an hour, he returns to home at 18.30 hours. How fast must he walk in order to return at 18.15 hours?

Mathematics

Your answer : **CORRECT**

A. 17 km/hr

B. 18 km/hr

C. 19 km/hr

D. 20 km/hr 

E. None of these

19. Pial spends 80% of his income. With an increase in the cost of living, his expenditure increases by 37.5 % and his income increases by  $16\frac{2}{3}$  %. The percentage of his income he currently saves is-

Mathematics

Your answer : **WRONG**

A.  $5\frac{3}{7}$ %

B.  $5(5/7)\%$

C.  $6(1/3)\%$  ✘

D.  $6(2/3)\%$

E. None of these

20. Two trains running in opposite directions cross a man standing on the platform in 27 seconds and 17 seconds respectively and they cross each other in 23 seconds. The ratio of their speeds is:

Mathematics

Your answer :

A. 1:3

B. 3:2 

C. 3:4

D. 5:4

E. None of these

21. The simple interest on a sum of money will be Tk. 600 after 10 years. If the principal is tripled after 5 years, what will be the total interest at the end of the tenth year?

Mathematics

Your answer :

A. 900 tk.

B. 1800 tk

C. 1200 tk. 

D. 1500 tk.

E. None of these

22. Alvie, Pulok and Kishore start from the same place and travel in the same direction at speeds of 30, 40 and 60 km per hour respectively. Pulok starts two hours after Alvie. If Pulok and Kishore overtake Alvie at the same instant, how many hours after Alvie did Kishore start?

Mathematics

Your answer : SKIPPED

- A. 3.0
- B. 3.5
- C. 4.0
- D. 4.5
- E. None of these

23. Two identical trains A and B running in opposite directions at same speed take 2 minutes to cross each other completely. The number of bogies of A are increased from 12 to 16. How much more time would they now require crossing each other?

Mathematics

Your answer : WRONG

- A. 20 sec
- B. 40 sec ✘
- C. 50 sec
- D. 60 sec
- E. None of these

24. Given that carbon-14 decays at a constant rate in such a way that it reduces to 50% in 5568 years, find the age of an old wooden piece in which the carbon is only 12.5% of the original.

Mathematics

Your answer : SKIPPED

- A. 15836 years
- B. 16668 years
- C. 16704 years
- D. 17552 years
- E. None of these

25. In an examination of  $n$  questions, a student replied 15 out of the first 20 questions correctly. Of the remaining questions, he answered one-third correctly. All the questions have the same credit. If the student gets 50% marks, the value of  $n$  is-

Mathematics

Your answer : **WRONG**
 A. 20

 B. 40

 C. 50

 D. 100

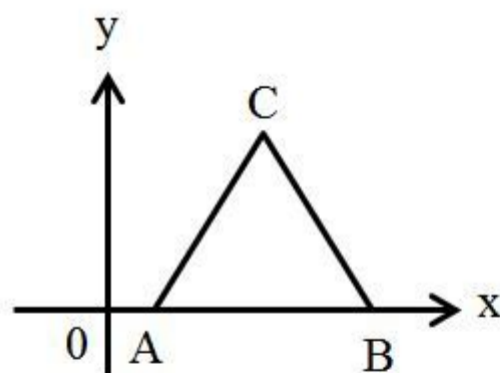
 E. None of these ✖

Data sufficiency 26 to 30:

- A. Statement 1 alone is sufficient but statement 2 alone not sufficient to answer the question asked.
- B. Statement 2 alone is sufficient but statement 1 alone not sufficient to answer the question asked.
- C. Both statement 1, 2 together are sufficient to answer the question but neither statement is sufficient alone.
- D. Each statement alone is sufficient to answer the question.
- E. Statement 1 & 2 are not sufficient to answer the question asked and additional data is needed to answer the statements.

26.

26. If A and B are points on the x-axis, what is the area of triangle ABC?



(1) The coordinates of A are (2, 0).

(2) The coordinates of B are (5, 0).

Mathematics

Your answer : **SKIPPED**
 A. Statement 1 alone is sufficient but statement 2 alone not sufficient to answer the question asked.

 B. Statement 2 alone is sufficient but statement 1 alone not sufficient to answer the question asked.

- C. Both statement 1, 2 together are sufficient to answer the question but neither statement is sufficient alone.
- D. Each statement alone is sufficient to answer the question.
- E. Statement 1 & 2 are not sufficient to answer the question asked and additional data is needed to answer the statements.

27. Is  $x = 0$ ?

- (1) The sum of  $x$  and 4 is 4.      (2) The product of  $x$  and 0 is 0.

Mathematics

Your answer : **WRONG**

- A. Statement 1 alone is sufficient but statement 2 alone not sufficient to answer the question asked.
- B. Statement 2 alone is sufficient but statement 1 alone not sufficient to answer the question asked.
- C. Both statement 1, 2 together are sufficient to answer the question but neither statement is sufficient alone.
- D. Each statement alone is sufficient to answer the question. ✘
- E. Statement 1 & 2 are not sufficient to answer the question asked and additional data is needed to answer the statements.

28. Is ABC a right triangle?

- (1) The measure of angle A is 40      (2) The measure of angle C is 50

Mathematics

Your answer : **SKIPPED**

- A. Statement 1 alone is sufficient but statement 2 alone not sufficient to answer the question asked.
- B. Statement 2 alone is sufficient but statement 1 alone not sufficient to answer the question asked.
- C. Both statement 1, 2 together are sufficient to answer the question but neither statement is sufficient alone.
- D. Each statement alone is sufficient to answer the question.
- E. Statement 1 & 2 are not sufficient to answer the question asked and additional data is needed to answer the statements.

29. What was the average grade in a class of 20 students?

- (1) The lowest grade was 60% and the highest grade was 92%.
- (2) The average grade of 10 students was 72%, and the average grade of the other 10 students was 88%.

Mathematics

Your answer : SKIPPED

- A. Statement 1 alone is sufficient but statement 2 alone not sufficient to answer the question asked.
- B. Statement 2 alone is sufficient but statement 1 alone not sufficient to answer the question asked.
- C. Both statement 1, 2 together are sufficient to answer the question but neither statement is sufficient alone.
- D. Each statement alone is sufficient to answer the question.
- E. Statement 1 & 2 are not sufficient to answer the question asked and additional data is needed to answer the statements.

30. A board 17 inches long is cut into 3 pieces. What is the length of the longest piece?

- (1) One piece is 9 inches long.      (2) One piece is 5 inches long.

Mathematics

Your answer : SKIPPED

- A. Statement 1 alone is sufficient but statement 2 alone not sufficient to answer the question asked.
- B. Statement 2 alone is sufficient but statement 1 alone not sufficient to answer the question asked.
- C. Both statement 1, 2 together are sufficient to answer the question but neither statement is sufficient alone.
- D. Each statement alone is sufficient to answer the question.
- E. Statement 1 & 2 are not sufficient to answer the question asked and additional data is needed to answer the statements.

## Section 2: Language & Communication

30×1=30 marks

Questions 31 to 35 are based on the following instruction:

Instruction: Fill in the gaps with suitable word from the alternatives.

The (31) \_\_\_\_\_ deal between Bangladesh and Myanmar does not give much reassurance regarding the safe return of all the Rohingya refugees to their homeland. There is no guarantee that once they go back, they will be treated with (32) \_\_\_\_\_, given full citizenship rights and that they will get back their homes. Myanmar has also refused entry to international (33) \_\_\_\_\_ organizations to assess the situation. In the wake of such hopelessness, tensions will mount within the refugee camps giving fodder to potential (34) \_\_\_\_\_ to erupt with spillover effects to neighboring regions. Is this a risk worth taking? It is about time countries that have greater influence on Myanmar, start

putting greater pressure on it to abide by the basic repatriation (35) \_\_\_\_\_, acknowledge the atrocities caused by its army and some citizens and take back the Rohingyas giving them full citizenship rights. This they must do for their own security and that of the region.

Verbal

Your answer : **WRONG** A. expatriation ✘ B. repatriation C. homecoming D. desultory E. lofty

32.

Verbal

Your answer : **CORRECT** A. dishonor B. dignity 👍 C. ethnicity D. rage E. appraisalment

33.

Verbal

Your answer : **WRONG** A. charitable B. humanitarian C. proponent D. UN ✘ E. peaceful

34.

Verbal

Your answer : **WRONG**

- A. militancy
- B. antagonists
- C. extremists
- D. collision
- E. enmity ✘

35.

Mathematics

Your answer : **CORRECT**

- A. dilemmas
- B. rules
- C. prerequisites 👍
- D. postulates
- E. logics

Questions 36 to 40 are based on the following instruction:

**Instruction: The underlined part of the given sentence may contain error. Select the choice that best replaces the underlined part keeping the original meaning intact**

**36. The concert this weekend promises to attract an even greater amount of people than attended the last one.**


Verbal

Your answer : **CORRECT**

- A. an even greater amount of people
- B. an ever larger amount of people

C. an amount of people even greater

D. a number of people even larger

E. an even greater number of people 

37. He was appointed to and dismissed from the post on the same day.

i) He was appointed to and dismissed from the post on the same day

ii) He was appointed and dismissed from the post on the same day

iii) He was appointed to the post and dismissed from it on the same day

Verbal

Your answer : **CORRECT**

A. Only i

B. only ii

C. both i & iii 

D. only iii

E. i, ii, & iii


38. The largest of all the planets, not only is Jupiter three times so massive as Saturn, the next larger planet, but also possesses four of the largest satellites, or moons, in our solar system.

Verbal

Your answer : **WRONG**

A. not only is Jupiter three times so massive as Saturn, the next larger

B. not only is Jupiter three times as massive as Saturn, the next largest

C. Jupiter, not only three times as massive as Saturn, the next largest 

D. Jupiter not only is three times as massive as Saturn, the next largest

E. Jupiter is not only three times so massive as Saturn, the next larger

39. November is traditionally the strongest month for sales of light trucks, but sales this past November, even when compared with sales in previous Novembers, accounted for a remarkably large share of total vehicle sales.

Verbal

Your answer : **WRONG**

A. but sales this past November, even when compared with sales in previous Novembers,

B. but even when it is compared with previous Novembers, this past November's sales

C. but even when they are compared with previous Novembers, sales of light trucks this past November

D. so that compared with previous Novembers, sales of light trucks this past November

E. so that this past November's sales, even compared with previous Novembers' sales, **✘**

40. The public's widespread belief in the existence of UFOs and their general curiosity about extraterrestrial life has generated considerable interest in science fiction.

Verbal

Your answer : **CORRECT**

A. UFOs and their general curiosity about extraterrestrial life has

B. UFOs and they are generally curious about extraterrestrial life which has

C. UFOs, as well as their general curiosity about extraterrestrial life, have

D. UFOs, as well as its general curiosity about extraterrestrial life, has **👍**

E. UFOs, as well as general curiosity about extraterrestrial life, have

Questions 41 to 45 are based on the following instruction:

**Instruction:** Underlined parts of the following sentences may contain error(s) in grammar, diction, usage or idiom. Choose the underlined portion that contains such error(s). If there is no error then select E.

41. This is important because the (A)census (B)count (C)determines how many House seats each (D)state gets. (E)No Error.

Verbal

Your answer : **WRONG**

A

B **✘**

C

D

E

42. Monday's development offers some hope that Mr. Trump (A)might (B)finally be forced to deal with (C)the threat that Mr. Putin (D)poses to the United States and its Western allies. (E)No Error.

Verbal

Your answer: **CORRECT**
 (A) 
 (B)

 (C)

 (D)

 (E)

43. (A)Carrying to term (B)a pregnancy against one's will is (C)punishment enough – in fact, it can (D)amount to torture, according to the United Nations Human Rights Council. (E)No Error.

Verbal

Your answer: **WRONG**
 (A)


 (B)

 (C) 
 (D)

 (E)

44. Under the anti-abortion bill, an "unborn human" (A)would be considered a person (B)under state criminal homicide (C)statutes and a prosecutor could decide to charge a woman who (D)ends a pregnancy with murder. (E) No Error.

Verbal

Your answer: **WRONG**
 (A) 
 (B)

 (C)

 (D)

(D) (E)

45. (i)What a big river the Padma is; (ii)but, (iii)it has made many (iv)a people homeless.

Verbal

Your answer : **WRONG** A. Only ii B. both i & iv ✘ C. both ii & iv D. only iv E. No Error.

Questions 46 to 48 are based on the following instruction:

Instruction: Identify the sentence(s) that is/are showing the correct form of the given word.

46. Attenuate:

I. Trash Island is ugly, but its horrors are attenuated by their meticulous construction and visual splendor, and quickly contained.

II. That was too attenuating a connection for the Supreme Court to find obstruction.

III. The plague did not, as you might expect, drastically attenuate the story's effectiveness and charm.

Verbal

Your answer : **SKIPPED** A. I only B. II only C. III & II only D. I & III only E. All of these

**47. Avarice:**

**I. I doubt generations of future angry white men are going to find in \"Chicago\" much to inspire their capitalistic avarice.**

**II. This practice isn't reserved for avaricious billionaires and Gulf monarchs, either.**

**III. As the film shows, they avariciously consume it whilst feeling rather guilty and self-conscious about it.**

Verbal

Your answer : **WRONG** A. I only B. II only C. III & II only **×** D. I & III only E. All of these**48. Gouge:**

**I. He stirred again when we began cleaning the cuts and gouges on his face, reaching for my hand at the first touch of stinging antiseptic.**

**II. A crater gouged into the ground at one site and splintered chairs scattered on a nearby street provide grim reminders of the 12 people killed and 50 injured.**

**III. When any executive engages in price gouging, it is a reflection on us all, and validates the negative bias against our industry.**

Verbal

Your answer : **SKIPPED** A. I only B. II only C. II & I only D. I & III only E. All of these

Questions 49 to 50 are based on the following instruction:

**Instruction: Find the misspelt word(s)**

49.

i. Diarrhoea ii. Dysentery iii. Bronchitis iv. Cholera

Verbal

Your answer : **WRONG** A. i ✘ B. iii C. i & ii D. ii & iii E. None of these

50.

i. Melancholy ii. Condemn iii. Profesor iv. Cachophony

Verbal

Your answer : **CORRECT** A. i B. iv C. i & ii D. iii & iv ✔️ E. None of these

Questions 51 to 53 are based on the following instruction:

Instruction: Choose the right meaning of the underlined phrases:

51. By the fear of Police the gang of college requested to bury the hatchet to the guy who was beaten so badly just for not obeying gang's order.

Verbal

Your answer : **WRONG**

A. To solve a hassle ❌

B. To make up a quarrel

C. To dispute over something

D. To repair something

E. None of these

52. She wanted to chew the cud before she could let them know about her decision

Verbal

Your answer : CORRECT

A. To annoy everyone

B. To think deeply 👍

C. To act suspiciously

D. To start doing something new

E. None of these

53. I think he is gunning for the top job because he has an axe to grind with some of his colleagues.

Verbal

Your answer : CORRECT

A. To confuse others

B. Have a bad situation

C. To rebuke

D. Have selfish reason 👍

E. None of these

Question 54 to 55 are based on the following instruction:

**Instruction: Arrange the options in such a way that a meaningful sentence is made.**

54. 1) Fight 2) tries 3) he 4) shy 5) of 6) always 7) me 8) to

Verbal

Your answer : **WRONG**

A. 32864157

B. 36281754

C. 32861457 ✘

D. 36821457

E. 36281457

55. 1) Held 2) branch 3) enemy 4) the 5) olive 6) out 7) the

Verbal

Your answer : **CORRECT**

A. 4317526

B. 4521673

C. 4316752 ✔

D. 4521736

E. 4517263

Questions 56 to 60 are based on the following comprehensions:

Instruction: Each of the following passages is followed by a set of questions. Read each passage and answer the accompanying questions, base your answer on what is stated or implied in the passage. Mark your answers on the Answer Sheet.

Passage One:

In the world today, we make health and end in itself. We have forgotten that health is really means to enable a person to do his work and do it well. a lot of modern medicine and this includes many patients as well as many physicians pays very little attention to health but very much attention to those who imagine that they are ill. Our great concern with health is shown by the medical columns in newspapers. The health articles in popular magazines and the popularity of television programs and all those books on medicine. We talk about health all the time. Yet for the most part the only result is more people with imaginary illness. The healthy man should not be wasting time talking about health: he should be using health for work. The work does the work that good health possible.

56. The passage suggests that:

Verbal

Your answer : **WRONG**

- A. health is an end in itself
- B. health is blessing
- C. health is only means to an end
- D. we should not talk about health
- E. health is wealth ✘

57. A healthy man should be concerned with:

Verbal

Your answer : **CORRECT**

- A. his work which good health makes possible 👍
- B. looking after his health
- C. his health which makes work possible
- D. talking about health
- E. None of these

58. Talking about the health all time makes people:

Verbal

Your answer : **WRONG**

- A. always suffer from imaginary illness ✘
- B. sometimes suffer from imaginary illness
- C. rarely suffer from imaginary illness
- D. often suffer from imaginary illness
- E. often suffer from delusions

**Passage two:**

I felt the wall of the tunnel shiver. The master alarm squealed through my earphones. Almost simultaneously, Jack yelled down to me that there was a warning light on. Fleeting but spectacular sights snapped into and out of view, the snow, the shower of debris, the moon, looming close and big, the dazzling sunshine for once unfiltered by layers of air. The last twelve hours before re-entry were particular bone-chilling. During this period, I had to go up in to command module. Even after the fiery re-entry splashing down in 81o water in south pacific, we could still see our frosty breath inside the command module.

59. The word 'Command Module' used twice in the given passage indicates perhaps that it deals with:

Verbal

Your answer : SKIPPED

- A. an alarming journey
- B. a commanding situation
- C. a journey into outer space
- D. a frightful battle.
- E. None of these

60. The statement that the dazzling sunshine was "for once unfiltered by layers of air" means:

Verbal

Your answer : SKIPPED

- A. that the sun was very hot
- B. that there was no strong wind
- C. that the air was unpolluted
- D. that there was no cold air
- E. None of above

**Section 3: Analytical Ability****15×1=15 marks**

**Instruction: Solve each of the following problems and mark the correct answers on your Answer Sheet.**

**Questions 61 to 68 are based on the following instruction:**

In each question below is given a statement followed by two conclusions numbered I and II. You have to assume everything in the statement to be true, then consider the two conclusions together and decide which of them logically follows beyond a reasonable doubt from the information given in the statement.

**61. Statement:**

Morning walks are good for health.

**Conclusions:**

**I. All healthy people go for morning walks.**

**II. Evening walks are harmful.**

Analytical

Your answer : **CORRECT**

A. if only conclusion I follows

B. if only conclusion II follows

C. if either I and II follows

D. if neither I nor II follows and 

E. if both I and II follow

**62. Statement:**

Parents are prepared to pay any price for an elite education to their children.

**Conclusions:**

**I. All parents these days are very well off.**

**II. Parents have an obsessive passion for a perfect development of their children through good schooling.**

Analytical

Your answer : **CORRECT**

A. if only conclusion I follows

B. if only conclusion II follows 

C. if either I and II follows

D. if neither I nor II follows and

E. if both I and II follow

**63. Statement:**

Government has spoiled many top ranking financial institutions by appointing bureaucrats as Directors of these institutions.

Conclusions:

I. Government should appoint Directors of the financial institutes taking into consideration the expertise of the person in the area of finance.

II. The Director of the financial institute should have expertise commensurate with the financial work carried out by the institute.

Analytical

Your answer : **WRONG**

A. if only conclusion I follows ✘

B. if only conclusion II follows

C. if either I and II follows

D. if neither I nor II follows and

E. if both I and II follow

64. Statement:

The XYZ Medical College has started a cell which will conduct counseling workshops in the field of stress management to patients and general public.

Conclusions:

I. The hospital has needed resources to start such activity.

II. Patients and general public feel a need to have such cell in the hospital.

Analytical

Your answer : **SKIPPED**

A. if only conclusion I follows

B. if only conclusion II follows

C. if either I and II follows

D. if neither I nor II follows and

E. if both I and II follow

65. Statement:

Sealed tenders are invited from competent contractors experienced in executing construction jobs.

Conclusions:

**I. Tenders are invited only from experienced contractors.**

**II. It is difficult to find competent tenderers in construction jobs.**

Analytical

Your answer : SKIPPED

- A. if only conclusion I follows
- B. if only conclusion II follows
- C. if either I and II follows
- D. if neither I nor II follows and
- E. if both I and II follow

**66. Statement:**

**The percentage of the national income shared by the top 10 percent of households in India is**

**Conclusions:**

**I. When an economy grows fast, concentration of wealth in certain pockets of population takes place.**

**II. The national income is unevenly distributed in India.**

Analytical

Your answer : SKIPPED

- A. if only conclusion I follows
- B. if only conclusion II follows
- C. if either I and II follows
- D. if neither I nor II follows and
- E. if both I and II follow

**67. Statement:**

**The best way to escape from a problem is to solve it.**

**Conclusions:**

**I. Your life will be dull if you don't face a problem.**

**II. To escape from problems, you should always have some solutions with you.**

Analytical

Your answer : SKIPPED

- A. if only conclusion I follows
- B. if only conclusion II follows

C. if either I and II follows

D. if neither I nor II follows and

E. if both I and II follow

**68. Statement:**

**People who speak too much against dowry are those who had taken it themselves.**

**Conclusions:**

**I. It is easier said than done.**

**II. People have double standards.**

Analytical

Your answer : **SKIPPED**

A. if only conclusion I follows

B. if only conclusion II follows

C. if either I and II follows

D. if neither I nor II follows and

E. if both I and II follow

**Questions 69 to 72 are based on the following information:**

**A letter carrier must deliver letter by making a stop at each of six buildings: T, U, V, W, X, and Y. Letter to be delivered is of two types, normal letter and special letter. The delivery of both types of letter is subject to the following conditions:**

**- Regardless of the type of letter to be delivered, letter to X, and letter to Y must be delivered before letter to V is delivered.**

**- Regardless of the type of letter to be delivered, letter to U and letter to T must be delivered before letter to Y is delivered.**

**- Letter to buildings receiving some special letter must be delivered, as far as the above conditions permit; before letter to buildings receiving only normal letter.**

**69. If T is the only building receiving special letter, which of the following lists the buildings in an order, from first through sixth, in which they can receive their letter?**

Analytical

Your answer : SKIPPED

 A. U, T, X, Y, W, V B. U, T, Y, X, V, W C. T, U, X, V, Y, W D. T, X, U, Y, W, V E. W, T, U, X, Y, V

70. If U, V, and Y are each receiving special letter which of the following lists the buildings in an order, from first to sixth, in which they must receive their letter?

Analytical

Your answer : SKIPPED

 A. T, U, X, Y, W, V B. U, T, W, X, Y, V C. U, T, Y, X, V, W D. V, U, Y, X, T, W E. Y, U, V, X, T, W

71. If the sequence of buildings to which letter is delivered is W, X, U, T, Y, V and if Y is receiving special letter, which of the following is a complete and accurate list of buildings that must also be receiving special letter?

Analytical

Your answer : SKIPPED

 A. W, U B. W, X C. X, U D. X, V E. W, X, U, T

72. If only one building is to receive special letter, and, as a result, W can be no earlier than fourth in the order of buildings, which of the following must be the building receiving special letter that day?

Analytical

Your answer : SKIPPED

 A. T B. U C. V D. X E. Y

Questions 73 to 75 are based on the following information:

Seven rooms in a building are to be painted. The rooms, which are on one side of a hallway, are numbered consecutively, one to seven, from the front of the building to the back. Each room is to be painted one color only according to the following conditions:

- Two rooms must be painted pink; two rooms must be painted brown; two rooms must be painted gold; and one room must be painted silver.
- The two rooms painted gold must be next to each other.
- The two rooms painted brown cannot be next to each other.
- The room painted silver cannot be next to an room painted pink.
- Room 3 must be painted pink.

73. If room 2 is painted gold, which of the following rooms must also be painted gold?

Analytical

Your answer : SKIPPED

 A. 1 B. 3 C. 4 D. 5 E. 6

74. If room 5 is painted pink, which of the following could be true?

Analytical

Your answer : SKIPPED

A. Room 1 is painted brown.

B. Room 2 is painted silver.

C. Room 4 is painted gold.

D. Room 4 is painted silver.

E. Room 7 is painted silver.

75. If room 4 is painted pink and a room that is painted gold is next to a room that is painted pink, which of the following must be true?

Analytical

Your answer : **SKIPPED**

A. Room 1 is painted gold.

B. Room 1 is painted silver.

C. Room 5 is painted brown.

D. Room 6 is painted silver.

E. Room 7 is painted brown.

## About us

Capstone started up in January 2013, and we have been on an epic ride ever since. Since our inception, we have tried to stay true to our core beliefs – Be inspired and to deliver an exceptional experience for our subscribers.

## Opening Hours

> Friday – Thursday

> 11:00am – 8:00pm



## Links

[Video](#)

[GPA Calculator](#)

[Terms and Conditions](#)

[Privacy Policy](#)

[Refund Policy](#)

## Contact Details

152/2/A-2, Green Road Rowshan Tower, 4th Floor, Panthapath Signal, Dhaka-1205

[019 72 27 78 66, 016 30 31 30 31](tel:01972277866)

[info@capstonebd.com](mailto:info@capstonebd.com)

